



වයඹ පළාත් අධ්‍යාපන දෙපාර්තමේන්තුව
Provincial Department of Education - NWP

දෙවන වාර පරීක්ෂණය - 2025
Second Term Test - 2025

Grade 8

Civic Education

Time : 2 hors.

Name / Index No.:

Part - I

- From question number 01 - 05, select the most suitable answer from the given brackets and fill in the blanks.

- functions as an organization established to protect child rights. (UNESCO / UNISEF / SAARC)
- It is stated that during the reign of king in Anuradhapura era a physician had been appointed for each group of ten villeges. (Buddhadasa / Pandukabhaya / Devanampiyatissa)
- is the telephone number of Police Emergency Services. (110 / 118 / 119)
- Destruction of mangroves will cause for (Drought / Tsunami / Cyclones)
- Lack of clear targets and expectations is a characteristic of leadership. (Nominal / Autocratie / Democratic)

- From questions 06 - 10 put (✓) if the following statements are correct or put (✗) if the statements are incorrect in the given brackets.

- The aim of Public Service is to improve the qualittative development of people's living conditions. ()
- At present, we can see plenty of extended families around the society. ()
- Education is important as the main factor that influences the advancement and the well-being of the human resource. ()
- Haj festival is held to celebrate the holy pilgrimage of the Prophet Mohammed's to Macca, the holy land of the Muslims. ()
- By managing emotions positively a person will be a person who does not become a victim of emotions as you have balanced personality. ()

● **From questions 11 to 15, underline the correct answer.**

11. A public service started during the British period,
 (1) Postal and Telecommunication Services. (2) Security services.
 (3) Health services. (4) Water supply.
12. A quality relevant to the democratic way of living is.
 (1) Non acceptance of public opinion.
 (2) Enjoying rights while not performing responsibilities.
 (3) Arriving at decisions through discussion.
 (4) Neglecting the other's opinion.
13. A quality of affectivity of a leader,
 (1) Deciding the targets (2) Assertiveness
 (3) Sensibility (4) Finding solutions.
14. We should be careful when using medicine for being ill. There we should not
 (1) Follow relevant medical advice. (2) Use harmful drugs
 (3) Use the prescribed dosage (4) Store drugs under correct temperature.
15. An advantage of building up national harmony in a multi-cultural society is,
 (1) lack of conflicts. (2) collapsing harmony.
 (3) building up of sustainable peace. (4) not developing the country.

● **From questions 16 to 20 Match the column A with column B.**

- | A | B |
|---|--|
| 16. Robert Knox | ★ Tsunami |
| 17. A natural disaster occur due to internal physical processes of the earth. | ★ has defined the term "culture" |
| 18. Tibetan monk venerable. S. Mahinda Thero. | ★ A Historical Relation of the Island "Ceylon" |
| 19. A natural disaster due to the changes in weather and climatic conditions | ★ value of duty. |
| 20. E. B. Taylor | ★ El nino |

(2 x 20 = 40 marks)

Part - II

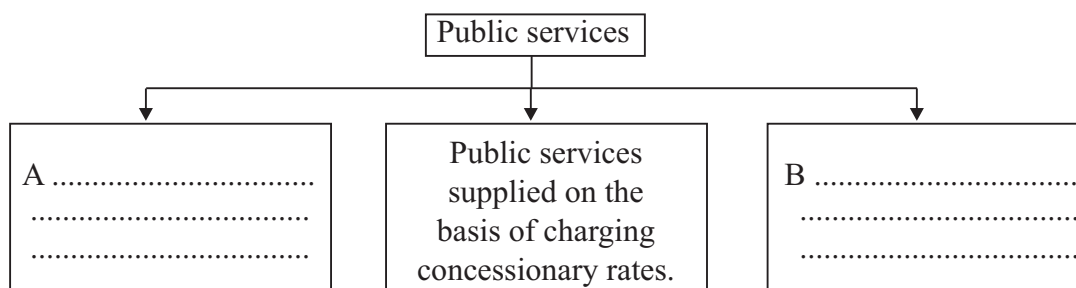
- **First question is compulsory.**
- **Answer five questions including the first one.**

01. (i) Write 02 services provided by the postal service to the people.
- (ii) Name 02 institutions established by the government to conserve the environment in Sri Lanka.
- (iii) Name 02 co-curricular activities practised in school in order to familiarize democratic way of living.
- (iv) Name 02 external reactions caused by happiness.
- (v) Name 02 places where all religions and ethnic groups worship in Sri Lanka.
- (vi) Name 02 countries with multicultural societies.
- (vii) Name 02 instances where chemical are used.
- (viii) Write 02 ways to contribute the sustainable development as a citizen.

(2 × 8 = 16 m)

02. Public services can be classified based on the way how they are provided to the general public.

- (i) Fill in the banks. (02 m)

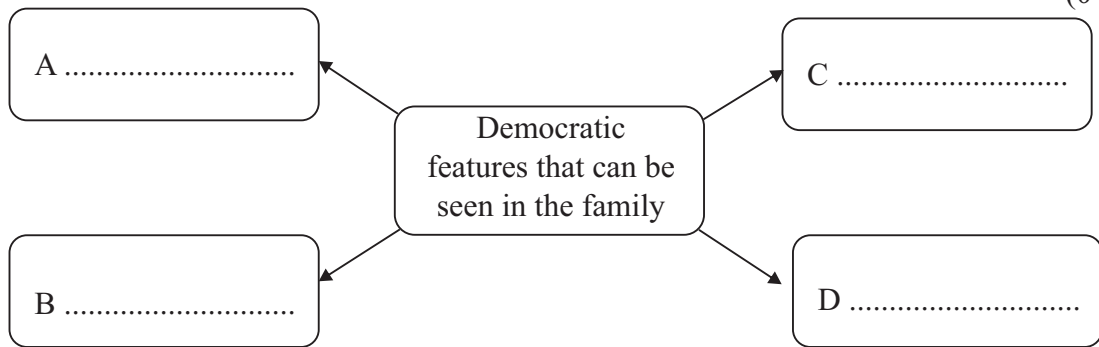


- (ii) Mention 02 common features of public service. (02 m)
- (iii) Write 02 reasons for supplying water as a public service. (02 m)
- (iv) Following are the three public services we used in our day to day life. write the duties and responsibilities that should be fulfilled by the institutions that provide these three services.

Public Service	Duty and Responsibilities that should be fulfilled.
Electricity	A B
Education	C D
Health service	E

(05 m)

03. (i) Complete the following chart including the democratic features that can be seen in the family. (04 m)



- (ii) Mention 2 general occasions where the family members work together with unity. (03 m)
 (iii) Write 02 reasons which cause the loss of equal opportunities for children being subjected to oppression at present. (02 m)
 (iv) Name 02 institutions that safeguard child rights in Sri Lanka. (02 m)

04. (i) Simply define what is Muticultural society. (02 m)
 (ii) Name 03 elements of culture. (03 m)
 (iii) Name the religious groups who celebrate the festivals given in the following pictures. (03 m)



A



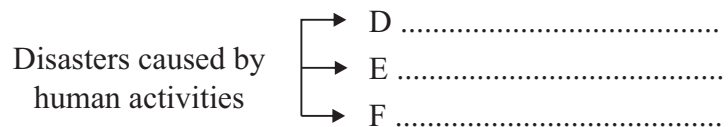
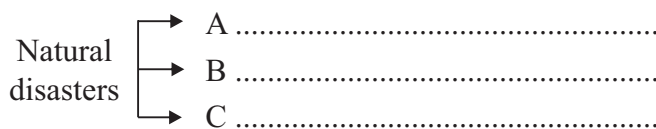
B



C

- (iv) Mention 03 advantages of building national harmony and sustainable peace. (03 m)

05. (i) Simply define natural disasters. (02 m)
 (ii) The accidents and disasters faced by man in modern society can be divided into two. Related to that, complete the following chart providing suitable examples. (06 m)



- (iii) Write 03 measures to be taken to avoid the damage of a thunder storm. (03 m)

06. (i) Complete the following chart related to the leader and follower. (03 m)

Leader	Follower
1. Principal	1. 2.
2. Chief Incumbent of the temple	3. 4.
3. Father	5. 6.

- (ii) Following are some features of autocratic leadership style and corrupted leadership style. Complete the given chart using them.

A - Display of wrong precedents.

B - Act very strictly.

C - Greater inclination towards privacy.

D - Threatening, intimidation.

E - Engaging in fraud, corruption and theft.

(05 m)

Autocratic leadership style	Corrupted leadership style
1	1
2	2
3	3

- (iii) Mention 03 qualities a democratic leader should possess.

(03 m)

07. (i)



A



B

The above pictures show the primary causes for road accidents. Identify and name them.


A -

B -

- (ii) Write 03 faults made by drivers in the given picture A.

(03 m)

(iii) Write the meanings of the given road signs.



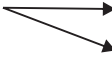
A

B

C

(03 m)

(iv) Mention the responsibilities of the government and police towards preventing road accidents.

Police  (1)
(2)

The government  (1)

(03 m)