



දෙවන වාර පරීක්ෂණය - 2025  
Second Term Test - 2025

Grade 7

Civic Education

Time : 02 hours

Name / Index No.:

Part - I

- Answer all the questions.
  - Select the most suitable answer and write it in the blanks for the questions 01 to 05.
01. The smallest social unit in a society is known as ..... (Family / School / Grama Niladhari Division)
  02. .... is an unfavorable emotion of man. (Happiness / Affection / Anger)
  03. We should fulfill ..... while enjoying rights. (rights / duties / traditions)
  04. .... is not a quality which is developed by doing sports. (Entertainment / Sorrow / Loyalty)
  05. Weather forecast, exchange rates, market prices are information which are provided by mass media ..... (monthly / annually / daily)
- If the statements from 06 to 10 are correct, put a tick (✓), if incorrect put a cross (✗), inside the brackets.
06. There are less number of members in an extended family relatively to a nuclear family. ( )
  07. It is enough that life objectives are in mind to achieve them. ( )
  08. An advantage of engaging in aesthetic activities is the ability to control emotions. ( )
  09. Inter - relationships in a society are not caused for its existence. ( )
  10. Right to education is a civil right of a person. ( )
- Underline the correct answer for the questions 11 to 15.
11. A duty and a responsibility of you as a member of a family is,  
(1) Right to nutrition (2) Right to education  
(3) Protecting the honour of the family (4) Right to protection

12. This is not a great quality of a person,

(1) Honesty

(2) Self-discipline

(3) Respecting leadership

(4) Refusing good things

13. A moral duty among following is,

(1) paying taxes

(2) fulfilling the duty correctly

(3) treating parents

(4) obligating the government

14. Government servants are to retire at the age of,

(1) 55

(2) 57

(3) 60

(4) 65

15. According to Shop and Office Employees Act.,

(1) Children below the age of 12 cannot be employed.

(2) Children below the age of 14 cannot be employed.

(3) Children below the age of 16 cannot be employed.

(4) Children below the age of 18 cannot be employed.

● **Select the correct answer for the questions 16 to 20 and write it in the blanks.**

(traditions / duties / neighbours / political / moral)

16. .... are the closest units which family maintains the relationships.

17. Electing any government is a ..... right of people.

18. Obligations are two types as legal and .....

19. The bond of fulfilling responsibilities is known as .....

20. Customs come from for a long time are called .....

(2 x 20 = 40 marks)

PART - II

- First question is compulsory. Answer all together five questions including the first question and another four.

01. (i) Write the two types of family according to the membership. (02 m.)

(1) .....

(2) .....

(ii) Write the rights you receive from the family and duties related to them in the table. (08 m.)

Rights	Duties
1. ....	1. ....
2. ....	2. ....
3. ....	3. ....
4. ....	4. ....

(iii) Write four qualities of a good citizen. (04 m.)

(1) .....

(2) .....

(3) .....

(4) .....

(iv) Write two types of rights. (02 m.)

(1) .....

(2) .....

02. (i) Write four favourable forces in the society. (04 m.)

(1) .....

(2) .....

(3) .....

(4) .....


(ii) Write four things that can be done to spend the leisure meaningfully. (04 m.)

- (1) .....
- (2) .....
- (3) .....
- (4) .....

(iii) Write three qualities which should be inculcated in a person by doing sports. (03 m.)

- (1) .....
- (2) .....
- (3) .....

03. (i) Mention the emotions related to following pictures. (04 m.)



A

B

C

D

- (A) .....
- (B) .....
- (C) .....
- (D) .....

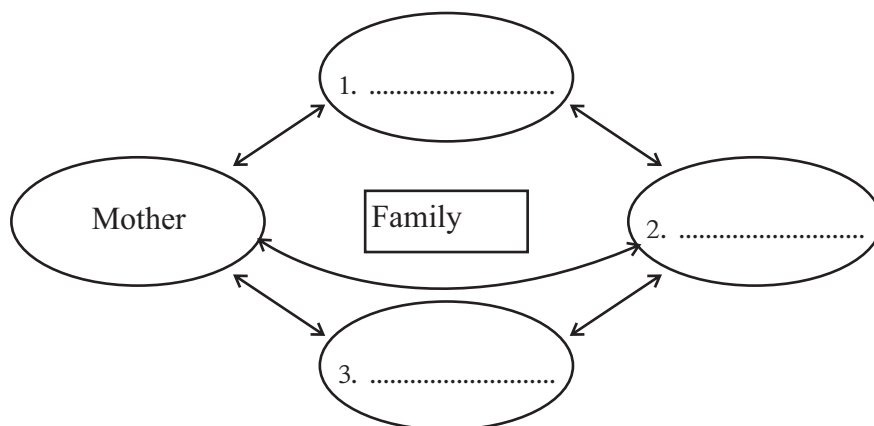
(ii) Write four activities which should be followed to control unfavourable emotions. (04 m.)

- (1) .....
- (2) .....
- (3) .....
- (4) .....

(iii) Write three information which should be printed on the products that are in packages. (03m.)

- (1) .....
- (2) .....
- (3) .....

04. (i) Complete the following diagram which shows the inter-relationships in a family. (03 m.)



- (ii) Complete the table using the institutions in the society. (08 m.)

Institutions	Service done by them
Ex.:- Funeral aid society	Provide aids for funerals.
1. ....	1. ....
2. ....	2. ....
3. ....	3. ....
4. ....	4. ....

05. (i) There are civil and political rights given below. Categorize them. (06 m.)  
(Right to live / Right to vote / Right to an employment / Right to education / Holding government posts / Criticizing the government)

Civil rights	Political rights
1. ....	1. ....
2. ....	2. ....
3. ....	3. ....

- (ii) Write the duties bound with the following rights. (03 m.)

- (1) Education - .....
- (2) Living - .....
- (3) Following any religion - .....

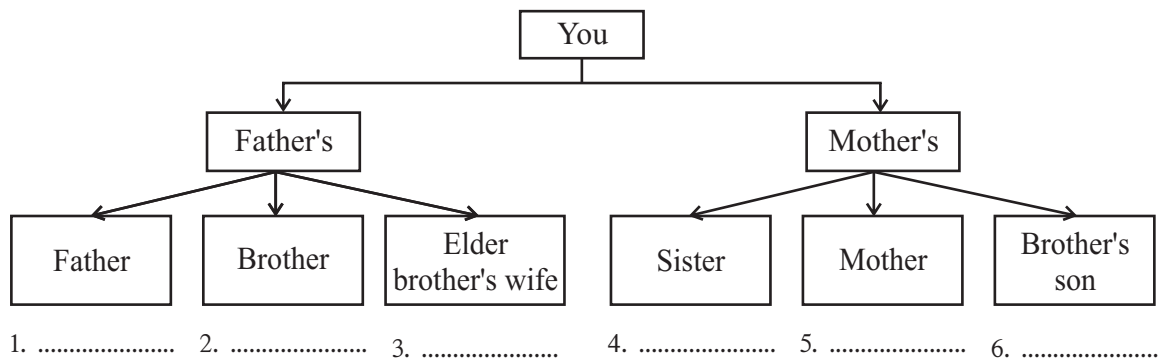
- (iii) Write two human qualities a person should develop. (02 m.)

- (1) .....
- (2) .....

06. (i) Mention three benefits of earning a sufficient income by doing an employment. (03 m.)

- (1) .....
- (2) .....
- (3) .....

- (ii) Fill the blanks in the following chart using the kinship terminologies (06 m.)



- (iii) Categorize the following customs and traditions practiced in the family. (02 m.)  
 (Lying the foundation stone for a new house / Daily religious observances / Taking meals together with other family members / Introduction to the letters of the alphabet?)

Customs	Traditions
1. ....	1. ....
2. ....	2. ....

07. (i) Write four disadvantages of not practicing employee's law correctly. (04 m.)

- (1) .....  
 (2) .....  
 (3) .....  
 (4) .....

- (ii) Categorize the following obligations into legal and moral obligations in the given table. (04 m.)

(Maintaining law and order / Treating and respecting elders / Following the laws of the state / Respecting national symbols.)

Legal Obligations	Moral Obligations
1. ....	1. ....
2. ....	2. ....

- (iii) Mention three impacts of employing children as labourers. (03 m.)

- (1) .....  
 (2) .....  
 (3) .....