



දෙවන වාර පරීක්ෂණය - 2025
Second Term Test - 2025

Grade 06

WESTERN MUSIC

02 Hours

Name / Index No. :

Paper - I

- **Underline the most suitable answers.**

01. Which of the following is the Musical Alphabet?

- (1) CDEFGAB (2) CDEFGABC (3) ABCDEFG (4) FGABCDE

02. Which of the following is an old music?

- (1) The Entertainer (2) Pinkpanther
 (3) Rhapsody in blue (4) Air on G string

03. Which of the following is a Quaver rest?

- (1)  (2)  (3)  (4) 

04. Name the symbol used to play the left hand notes?

- (1) Treble clef (2) G clef (3) Bass clef (4) C clef

05. Which of the following is equal to one Minim?

- (1)  (2)  (3)  (4) 

06. Which of the following is the center of the Great staff

- (1) E (2) M : C
 (3) D (4) G

07. Which of the following has one count?

- (1) Crotchet (2) Minim (3) Quaver (4) Semibreve


08. Which of the following is known as G clef?

- (1)  (2)  (3)  (4) 

09. Which of the following is the correct number of holes in a Recorder?

- (1) 8 (2) 6 (3) 7 (4) 5

10. Which of the following is a D?



(1)

(2)

(3)

(4)

11. Which of the following is not a Natural Sound?

(1) baby crying

(2) wind blows

(3) Thundering

(4) Sea waves

12. Which of the following is odd one out?

(1) Geta beraya

(2) Udekkiya

(3) Bummediya

(4) Piano

13. Which of the following is a Social function?

(1) Christmas

(2) Wedding

(3) Ramazan

(4) National Hero's day

14. Which of the following separate the music into bars ?

(1) Staff

(2) Double bar line

(3) Time signature

(4) Bar line

• **Match A with B.**

A

B

15. Semibreve note



16. Crotchet rest (new)



17. Minim note



18. Quaver rest



19. crotchet rest (old)



20. Quaver note



(1 x 20 = 20)

Part - II

• **Answer the question No. 01 and 02 others.**

01. (a) Answer the following questions using the given melody below.

Twinkle, Twinkle, Little Star




- (1) What is the title of the melody ? (1 mark)
- (2) What is the time signature of the melody? (1 mark)
- (3) How many bars are there in all? (1 mark)
- (4) Circle the Minim notes (1 mark)
- (5) Name all the notes in bar 7 (2 marks)
- (6) Name 2 key board instruments which can play this melody (2 marks)
- (7) Mark all the notes in bar 9 on the key board. (2 marks)



02. (a) Name the following notes. (3 marks)



(b) Write these notes on the given staff. (3 marks)




M.C

E on a line

B on a line

(c) Draw a Great Staff. (4 marks)

03. (a) Name the following Sri Lankan Drums. (3 marks)



1. 2. 3.

- (b) Describe the time signatures. (2 marks)

i) $\frac{2}{4}$ -

ii) $\frac{3}{4}$ -

- (c) Add bar lines to these tunes. (5 marks)

$\frac{2}{4}$ ♩ ♩ ♩ ♩ ♩ ♩ ♩ ||

$\frac{3}{4}$ ♩ ♩ ♩ ♩ ♩ ♩ ♩ ||

04. Choose the word from the bracket and fill the blanks correctly.

(unpleasant, wedding march, pleasant, ජය මංගල ගාථා, five, four, eleven, ten, Social, G Clef, Old music, Religious, F Clef, New music)

- (1) "Entertainer of Scott Joplin" is a piece of
- (2) There are lines in the Stave
- (3) The Bass Clef is also known as
- (4) Great staff has lines
- (5) is played at church weddings
- (6) Sound of baby crying is a sound.
- (7) is sung at poruwa ceremony
- (8) Birthday party is a function.
- (9) Great Staff has Spaces.
- (10) Birds chirping is a Sound.

(10 marks)




දෙවන වාර පරීක්ෂණය - 2025
Second Term Test - 2025

Grade 06

WESTERN MUSIC

PRACTICAL TEST

01. Sing any song 10 marks
02. Play G A B notes on Recorder. 10 marks
03. Identify notes on key board.



1. Middle C
2. G
3. F
4. A
5. B

20 marks

04. Name two keyboard instruments you know. 10 marks

Grade 06

ANSWER PAPER




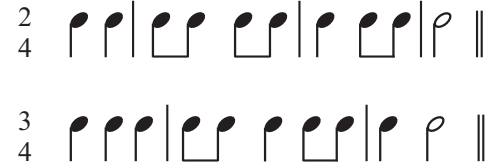
Western Music

Paper - I

- | | | | |
|---------|---------|---------|-------------------------|
| 01. (3) | 06. (2) | 11. (1) | 15. Semibreve note |
| 02. (4) | 07. (1) | 12. (4) | 16. Crotchet rest (new) |
| 03. (1) | 08. (3) | 13. (2) | 17. Minim note |
| 04. (3) | 09. (3) | 14. (4) | 18. Quaver rest |
| 05. (2) | 10. (2) | | 19. crotchet rest (old) |
| | | | 20. Quaver note |

Paper - II

(1x20=20 marks)

01. (1) Tiwinkle, Tiunkle Little Star (1 mark)
- (2) 4 (1 mark) (3) 12 bars (1 mark)
- (4) (1 mark) (5) A, A, G, G (2 marks)
- (6) Piano, Melodica (2 marks)
- (7)  (2 marks)
02. (a) E, B, C, B, F, M.C (3 marks)
- (b)  (1 x 3 = 3 marks)
- (c)  Middle C (4 marks)
03. (a) Yak beraya, Davula, Udekkiya. (3 marks)
- (b) (1) Simple duple with crotchet beats.
- (2) Simple triple with Crotchet beats. (2 marks)
- (3)  (5 marks)
04. (1) New music (2) Five (3) F Clef
- (4) Eleven (5) wedding march (6) Unpleasant
- (7) ජය මංගල ගාථා (8) Social (9) ten
- (10) pleasant (10 marks)