



විශාල පළාත් අධ්‍යාපන දෙපාර්තමේන්තුව  
Provincial Department of Education - NWP

දෙවන වාර පරීක්ෂණය - 2025  
Second Term Test - 2025

Grade 6

Civic Education

Time : 2 hors.

Name / Index No.:

### Part - I

- Answer all the questions.
  - Select the correct answer for the questions 01 to 05 and write it in the blanks.
- ..... is one of the sources that help to find information about the history of the school. (electoral register / log- book / bio - data)
  - The administrative unit developed by joining several Grama Niladhari's divisions is the ..... (Grama Niladhari's division / Divisional Secretariat / District)
  - ..... is not an emblem representing the identity of the school (National flag / School flag / School Anthem)
  - ..... is not a local Government Institution. (Village Council / Urban Council / Provincial Council)
  - A district belongs to Northern province is ..... (Mannar / Kandy / Matara)
- If the statements from 06 to 10 are correct put a (✓) if incorrect, put a (✗).
- Payment of taxes correctly is a right of whom recieve services. ( )
  - Proper provision of one's service is a duty of the institution that provide us with services. ( )
  - Conservation of forests can be followed to conserve physical resources. ( )
  - According to the administrative divisions of our country, the smallest administrative unit is the Grama Niladhari's divisions. ( )
  - Dr. C. W. W. Kannangara is the founder of the "State Osusala". ( )
- Underline the correct answer for the questions 11 to 15.
- This is not a party included in the plan of a school organizational structure.  
(1) Students (2) Teachers  
(3) Principle (4) Parents
  - The information which is not included in a bio- data  
(1) Name (2) Address (3) Political party (4) Date of Birth

13. Who is called as "The Father of Free Education" of Sri Lanka ?
- (1) Mr. Ananda Samarakoon (2) Mr. Senaka Bibile
- (3) Dr. C. W. W Kannangara (4) Mr. Martin Wickramasinghe.
14. A characteristic of a systematic student.
- (1) Habitually late (2) Neglects essential steps
- (3) Work systematically (4) Difficult to face challenges.
15. The officer who helps the people by delivering letters and parcels is,
- (1) Police officer (2) Post officer (3) Grama Niladhari (4) Medical officer

- Answer the questions 16 to 20 using the pictures given.



A



B

16. (i) What is shown by picture A ?  
.....
- (ii) Which place does it represent the identity of?  
.....
17. (i) Name the physical resource in picture B.  
.....
- (ii) Mention 01 step that can be followed to conserve that physical resource.  
.....
18. Write 02 situations where picture A is used.  
1. .... 2. ....
19. Write 02 districts where you can see the physical resource in picture B.  
1. .... 2. ....
20. Name 02 postures to be followed when the picture A is raised.  
1. .... 2. ....

(2 x 20 = 40 marks)

Part - II

- The first questions is compulsory.
- Answer five questions including the first question.

01. (i) What is the situation given in picture A?

..... (02 marks)

(ii) Write 02 qualities that raise within the students by working in the situation given in picture A

1. ....

2. ....(02 marks)

(iii) Identify the pictures given below and name them.



(06 marks)



A. ....



B. ....



C. ....



D. ....



E. ....

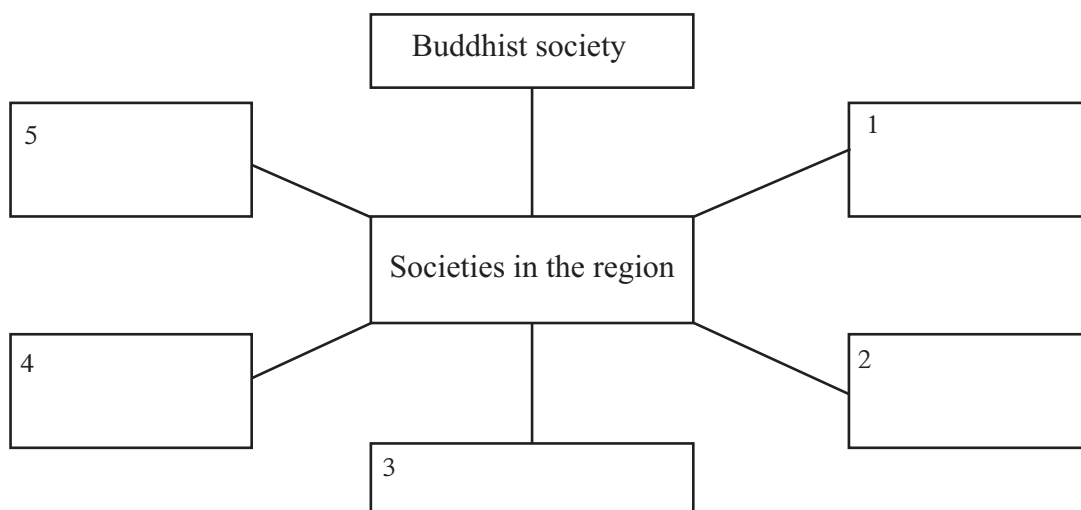


F. ....

(iv) Using the above pictures complete the given chart on the physical resources and human resources. Write the letter of the picture. (06 marks)

Human resources	Physical resources
01 .....	01 .....
02 .....	02 .....
03 .....	03 .....

02. (i) Fill in the blanks in the following chart. (05 marks)



- (ii) Write 01 service provided by the each society you mentioned above. (06 marks)

Society	Service Provided
1. ....	.....
2. ....	.....
3. ....	.....
4. ....	.....
5. ....	.....
6. ....	.....

- 03 (i) Mention the 03 Local Government Institutions. (03 marks)
- (ii) Complete the following chart including 02 services rendered by the Local Government Institutions. (06 marks)

Local Government Institution	Services
01 .....	01 ..... 02 .....
02 .....	01 ..... 02 .....
03 .....	01 ..... 02 .....

- (iii) Mention the heads of the each council given below.

- (1) Municipal Council - .....
- (2) Urban Council - ..... (02 marks)

04. (i) Match A with column B. (05 marks)

A	B
1. Impulsiveness	* a right
2. Truthful	* a challenge
3. Economic difficulties	* A good quality
4. The right to education	* a duty
5. Involvement in studies	* a weakness

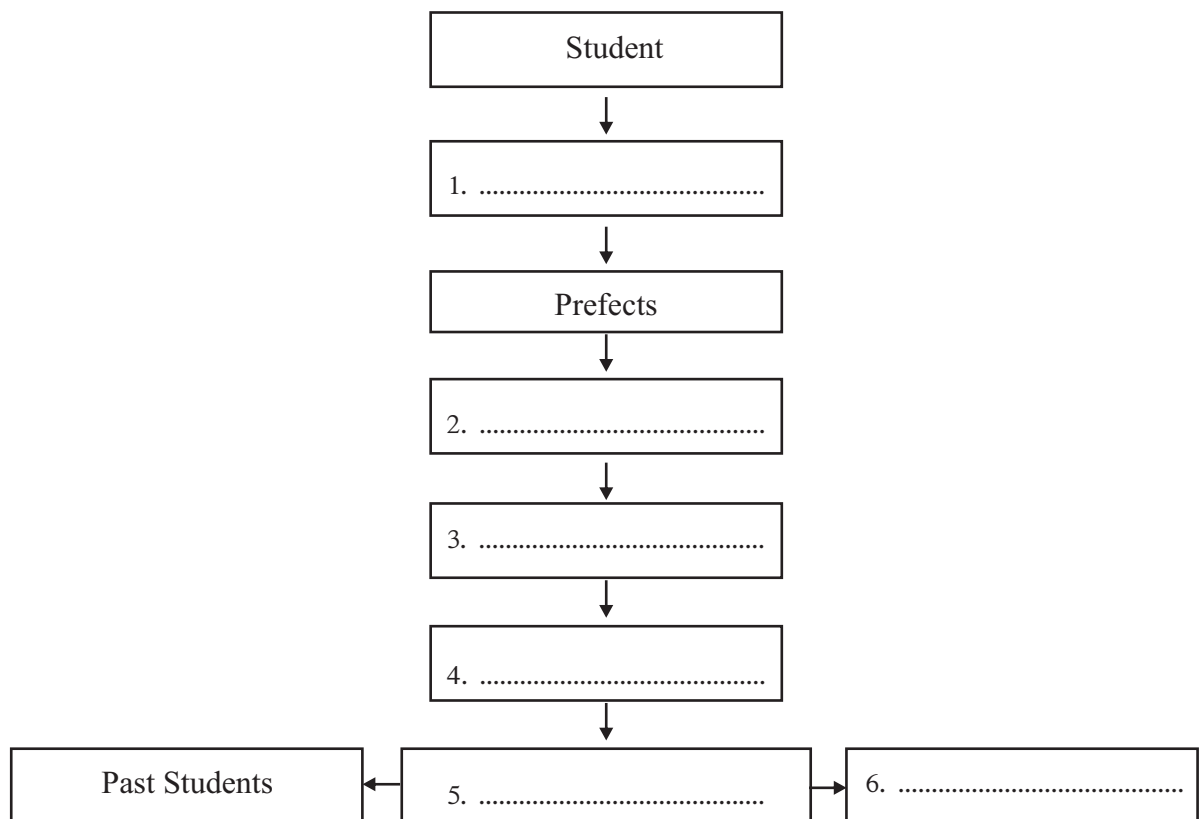
(ii) Mention 03 rights you get as a member of the school community. (03 marks)

1. ....
2. ....
3. ....

(iii) Write 03 features of child - friendly school. (03 marks)

1. ....
2. ....
3. ....

05. (i) Fill in the blanks. (06 marks)



(ii) Mention 05 other roles within the school structure. (05 marks)

1. ....
2. ....
3. ....
4. ....
5. ....

06 (i) Mention 02 main parts of physical resources. (02 marks)

1. ....
2. ....

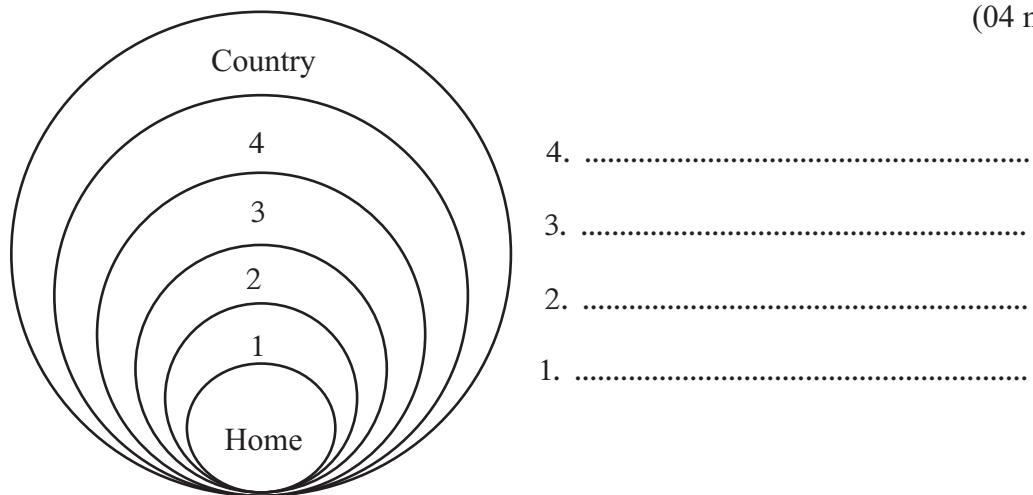
(ii) Mention 02 resources created by man. (03marks)

1. ....
2. ....
3. ....

(iii) Mention 01 use of the physical resources given below. (06 marks)

1. Sunlight - .....
2. Air / Wind - .....
3. Water - .....
4. Land - .....
5. Forest - .....
6. Minerals - .....

07 (i) Fill in the blanks in the given diagram related to the administrative system in Sri Lanka. (04 marks)



(ii) Write 01 production / creation done by the following resources. (04 marks)

1. Clay - .....
2. Timber - .....
3. Iron - .....
4. Bamboo grove (Pan) - .....

(iii) Complete the following diagram on various relationships that exist between the school and society. (03 marks)

