

Grade - 08

Third Term Test - 2024/2025

41 E I,II

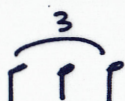

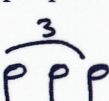

Index No.....

Western Music

Time - 02 hours

Part I

- Answer all questions
- Underline the correct answer.

- Which of the following is not a Sri Lankan drum?  
 1. Yak Beraya      2. Daula      3. Thablava      4. Uddekkiya
- Which composer became deaf during the latter part of his life?  
 1. Bach      2. Handel      3. Mozart      4. Beethoven
- How many semitones are there from A<sup>x</sup> to D<sup>b</sup>?  
 1. 3      2. 4      3. 2      4. 5
- Diatonic semitone above G is.....  
 1. A<sup>#</sup>      2. A<sup>b</sup>      3. Ax      4. A<sup>h</sup>
- The tie is .....  
 1. Play the notes smoothly  
 2. Play the notes one after the other  
 3. Play the different notes  
 4. Play the 1st note and hold the 2nd note to it's value.
- The dominant of A<sup>b</sup> major is,  
 1. E<sup>b</sup>      2. E<sup>9</sup>      3. E<sup>x</sup>      4. E<sup>#</sup>
- Which of the following notes group equal to a crotchet  
 1.       2.       3.       4. 
- A minor 3rd has ..... Semitones.  
 1. 2      2. 4      3. 5      4. 3
- Which of the following is odd one out  
 1. Episodical form      2. Song form      3. Ternany form      4. Binary form
- Leader of the orchestra.  
 1. plays the oboe      2. plays the piano      3. plays the guitar      4. plays the 1st violin
- Which of the following instrument uses alto clef to write their music.  
 1. Viola      2. Violin      3. Cello      4. Double bass
- Which major scale has 4 sharps as it's key - signatures?  
 1. E major      2. E<sup>b</sup> major      3. E minor      4. B major
- How many strings are there in an electric lead guitar?  
 1. 5      2. 12      3. 6      4. 7

14. Which of the following is an opera?

1. Eroica

2. Marriage of Figaro

3. moonlight sonata

4. All of these

15. Compound duple time - signatures is,

1. Two dotted crotchet beats in a bar

3. Two minim beats in a bar

2. Two quaver beats in a bar

4. Three dotted quaver beats in a bar

• **Match the correct answer**

16. A calypso song

G<sup>b</sup>

17. Old favourite song

G

18. Stephen foster

whispering hope

19. Enharmonic Equivalent of f# is

old folks at home

20. Diatonic semitone above f# is

Jamican fairwell

(20 x 1 = 20 marks)

**Part II**

• **Answer three of the following including the first question.**

01. Refer to the song and answer the questions given below

**Two Part Inventions (Invention 1)**

Bach


**Allegro**

- i) Write the name of this piece? .....
- ii) Who is the composer of this piece? .....
- iii) What period does this composer belongs? .....
- iv) Write a contemporary composer? .....
- v) Name the 'Rests' used in this piece? .....
- vi) What does '>' mean? .....
- vii) Name the key of the piece? .....
- viii) What does 'Allegro' mean? .....
- xi) Name the interval marked '\*'? .....
- x) circle the lowest pitch note in the piece.....


(10marks)

02. Write the following scales


(a) F major ascending & Descending in quavers with out key signature, treble clef (4 marks)



(b) A major ascending in crotchets in with key signature in F clef. (4 marks)



(c) Write the following key signatures (2 marks)



C major

B major

03. Write the following notes (10 marks)

(a)

Semi tone higher      Semi tone lower      Tone higher      Tone lower      chromatic semi tone higher

(b)


A as a minim in a space      F below the stave as a quaver      G above the stave as a semi breve      E in a space as a Quaver      A on a leger line as a minim

04. Name the following intervals (5 marks)

(a)

1. ....
2. ....
3. ....
4. ....
5. ....

(b) Fill this puzzle (5 marks)



**Across**

1. The shortest distance between any two notes.
2. This means 'soft'

**Down**

1. The value name for 4 counts
3. Name of this note (p)
4. 'Waltz' is in this time