

Second Term Test - 2024

41	E	I,II
----	---	------

Western Music I

Time - 01 Hour


- **Answer all questions.**

- In each of the questions 1 to 40. Pick one of the alternatives 1, 2, 3, 4 which is correct or most appropriate.
- Mark a cross (x) on the number corresponding to your choice in the given answer sheet.

-

6	3	4	4
1.8	2.4	3.8	4.4

02. Which of the following rests would suit to complete the given bar according to the time - signature?




1. 9 5 2. 7 5
3. 9 7 5 4. 7 7 7

-

1. Semi breve 2. Breve 3. 3 Crotchets 4. Minim

1. Perfect 8th
2. Unison
3. Major 8th
4. Major 2nd



05. Which irregular note group can be used to complete the given bar?



1.  2. 

3.  4. 

06. Which illustrates the way the given note is played?



1. 2. 3. 4.

1. Upper Mordant 2. Inverted Turn 3. Acciaccatura 4. Appoggiatura

08. Which of the following words would best suit the given rhythm?








1. Colombo 2. Every thing 3. following 4. Kurunegala



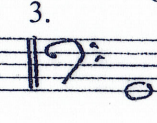










09. Which of the following notes can be named only by two letter names Enharmonically.

1.F 2.B 3.A^b 4.G^b

10. A'song from' is also called?

1. Variation form 2. Binary form 3. Rondo form 4. Ternary form

11. Which of the following composition is not associated with Programme music?
 1. Pastoral symphony 2. 48 Preludes and fugues
 3. Four Seasons 4. William Tell Overture
12. Which of the following compositions is in Variation form?
 1. Fur Elise 2. Harmonious Blacksmith
 3. Humoresque 4. Happy Birthday
13. Which of the following is least related to the others.
 1. Carter's Song 2. Harvesting Song 3. Boatmen's Song 4. Swing Song
14. Which of the following instruments uses the term Una Corda?
 1. Guitar 2. Violin 3. Piano forte 4. Flute
15. Which of the following instrument is Used in 'Oriental Groups'?
 1. Harmonium 2. Trombone 3. Ukelele 4. Bass Guitar
16. Which of the following birds is the Best bird to imitate human speech?
 1. Common drongo 2. Magpie robin 3. Crow 4. Grackle
17. Which of the following notes has the highest frequency?
 1.  2.  3.  4. 
18. Which of the following is used to generate a huge variety of musical sounds and noises?
 1. Sampler 2. Synthesizer 3. MIDI 4. Notation software
19. Which of the following technique is used to change the position of a melody to a required pitch
 1. Transposition 2. Melody 3. Rhythm 4. Pitch
20. Which of the following time - Signature is the half the value for the given bar.

 1. $\frac{3}{4}$ 2. $\frac{3}{8}$ 3. $\frac{3}{2}$ 4. $\frac{6}{8}$
21. Which of the following intervals build a Major Triad?
 1. Major 3rd / Major 3rd 2. Minor 3rd / Minor 3rd
 3. Major 3rd / Minor 3rd 4. Major 3rd / Major 5th
22. Which of the following gives the same meaning as 'Rallentando'?
 1. Accelerando 2. Ritardando 3. Cantabile 4. Pizzicato
23. Which of these is not an Opera?
 1. Album for the young 2. Fidelio 3. Flying Dutchmns 4. Magic Flute
24. Which of the following Cadence is made up of the chords dominant to tonic?
 1. Plagal cadence 2. perfect cadence 3. Imperfect cadence 4. Interrupted cadence
25. Which of the following terms indicate the slowest tempo?
 1. Allegro 2. Presto 3. Moderato 4. Adagio

26. Which composition was written to commemorate the opening of the Suez Canal?
 1. Verdi's Aida
 2. Chopin's Minute Waltz
 3. Haydn's Creation
 4. Gershwin's Rhapsody in Blue
27. Which of the following composers were born in Russia?
 1. Stravinsky / Debussy
 2. Ravel / Prokofiev
 3. Prokofiev / Chopin
 4. Tchaikovsky / Prokofiev
28. Which of these would be the Minor 6th occurring in the scale of C melodic Minor?
 1.  2.  3.  4. 
29. Which of the following is Vb in D major?
 1.  2.  3.  4. 
30. The leading note of G Harmonic minor is the same as the Dominant of a major scale. Which of the following major scales is it?
 1. B^b major
 2. G minor
 3. B major
 4. F major
31. Which of the following places would the key note of the second inversion of the Tonic triad appear?
 1. Middle
 2. Bottom
 3. Top
 4. Any where
32. Which of the following is the correct notation when its one octave lower?

 1.  2.  3.  4. 
33. Which is a song from a Nurthi?
 1. Suwada Padma
 2. Shantha John Ge Veediye Kade
 3. Ale Banda Mage Ramya Wan
 4. Gambeera Thedathi Konsthanthinupure
34. Which of the following notes are not found in Blue scale?
 1. 4th and 7th
 2. 5th and 6th
 3. 3rd and 4th
 4. 2nd and 6th
35. Which of the following is a double reed transposing instrument?
 1. Bassoon
 2. Oboe
 3. Double Bassoon
 4. Clarinet
36. Which of the following will best describe a musical composition for a solo piano accompanied by the Orchestra?
 1. Piano Solo
 2. Piano Duet
 3. Piano concerto
 4. Symphony
37. The musical in which the song 'Far Beyond the star' is?
 1. Singing Nun
 2. Sound of Music
 3. Wizard of Oz
 4. Mary Poppins
38. To which category does the song 'You Raise Me Up' fall into?
 1. Calypso song
 2. Pop song
 3. Old favourite song
 4. Round Song
39. To which family of instruments does the 'Glockenspiel' belong?
 1. String
 2. Wood wind
 3. Brass wind
 4. Percussion
40. Which of the following composers lived the shortest life?
 1. Schubert
 2. Britten
 3. Mozart
 4. Bartok

41 E I,II

Western Music II

- Answer five questions including question No. 1 and Selecting two questions from each of the parts A and B on this paper itself.

Gipsy Rondo

J. Haydn



- i) To which period of music does the composer belong


.....(1 M)

ii) Write 2 sentences about the composer

ii) Write 2 sentences about the composer

..... (2 M)


- iii) Name a contemporary composer of the period and mention a work by him.(1 M)
- iv) (a) The key of the musical extract is(1 M)
 (b) In which degree of the scale does the music extract begin?(1 M)
- v) Describe the time signature of this extract.(5 M)
- vi) Name the cadences marked as A and B
 A B (2 M)
- vii) Describe how the musical extract should be played to suit the given tempo and dynamic markings including the bar numbers
(1 M)
- viii) Explain two articulation marks given in the musical extract.
(1 M)
- ix) Re write bars 1 & 2 of the treble def melody, one octave lower in the bass clef. (1 M)




PART A

• Answer any two questions


02. i) Write the B major scale with key signature, in descending and ascending form, using F clef and the rhythm of a March. Add the time signature. (4 M)




- ii) Compose a 4 bar melody using the notes of F minor in compound duple time in dotted crotchet beats. End the melody with the leading note moving to the tonic. (4 M)




- iii) Write pentatonic scale on G ascending. Use the tenor clef. (4 M)



03. i) Insert the correct time signatures. (2 M)



- ii) Write the following triads as required. (4 M)
 (a) 2nd inversion of the subdominant triad of A Major with key signature.
 (b) Root position of the tonic triad of G minor, without key signature.



- iii. Complete the melody by adding an answering phrase in the same style. Add suitable marks of tempo, phrasing and dynamics to the complete melody. (6 M)




04. i) Complete the cadences in the given melodies by writing the appropriate bass notes. Write Roman numerals under the chords to indicate the cadences. (6 M)



Cadence

- ii) Write the following lyrics correctly under the given rhythmic pattern. (6 M)

Just before the battle mother
I am thinking most of you
While up on the field we're watching
With the enemy in view



Part B

- Answer 02 questions only.

05. i. Convert the following oriental notation in to western notation (6 M)

ಎ | ಲ' ಎ ಖಿ ಂ - | ಶ್ರೀ' ಎ ಎ + | ಛ ಖಿ ಜಿ ಜಿ | ಂ - - ||



- ii. Complete the following passage, in four parts according to the given chord indications. (6 M)



06. i. Re write this passage in open score using Treble, Alto, Tenor & Bass (8 M)



Four sets of empty musical staves for transcription, each consisting of a treble and bass clef staff.

- ii. Name two characteristics of Jazz Music? (2 M)

.....

- iii. Name two programme music pieces done by Romantic composers. (2 M)

.....

07. i. Answer the following questions.

1. Name a similarity of Nurthi & Nadagam. (1 M)

.....

2. How many valves are there in a standard trumpet? (1 M)

.....

- ii. Complete the information required of the composers of the following compositions.

- (a) The composer of the 'Fidelio' (5 M)

Name :
 Period :
 Contemporary composer :
 Type of work :
 Nationality :

- (b) The composer of the 'Peter and the wolf' (5 M)

Name :
 Period :
 Contemporary composer :
 Type of work :
 Nationality :