



තෙවන වාර පරීක්ෂණය - 07 ශ්‍රේණිය - 2023  
Third Term Test - Grade 07 - 2023

Western Music

Two Hours

Name / Index Number : .....

Paper - I

● Under line the correct answer

01. Another name for "Timpani" ?

- i. Snare drum
- ii. Bass drum
- iii. Kettle drum
- iv. Side drum

02. 3rd line of the Bass clef is,

- i. D
- ii. B
- iii. C
- iv. E

03. Which of the following is a Sri Lankan drum?

- i. Thabla
- ii. Side drum
- iii. Kettle drum
- iv. Getaberaya

04. The total value of the given notes would be



- i. Minim
- ii. Crotchet
- iii. Semibreve
- iv. Breve

05. Which of the following is a group of 2 beat rhythm?

- i. Simple Triple
- ii. Simple duple
- iii. Triplet
- iv. Simple quadruple

06. Which key has F# in the Key Signature?

- i. G major
- ii. F major
- iii. C major
- iv. All of these

07. A Triad Consists of ..... notes.

- i. 2 notes
- ii. 5 notes
- iii. 3 notes
- iv. 7 notes

08. A composer belongs to Baroque period is,

- i. Mozart
- ii. J.S. Bach
- iii. Beethoven
- iv. Scot Joplin

09. Which of the following has a semitone?

- i. F# - A
- ii. C - B
- iii. E - F#
- iv. G - A


10. A composition for New Music ?

- i. Surprise Symphony
- ii. Magic Flute
- iii. Air on G string
- iv. Pink panther

11. Which of the following composers were born in Same year ?

- i. Beethoven - Bach
- ii. Bach - Handel
- iii. Scarlatti - Haydn
- iv. Bach - Beethoven

12. Which of the following is a Harmonic interval.



13. Which of the following instrument accompanied Viridu?

- i. Banku Rabana
- ii. Daula
- iii. Rabana
- iv. Getaberaya


14. Which Instruments used in Baroque period?

- i. Piano - organ
- ii. Kettle drum - organ
- iii. Congo drum - organ
- iv. Harpsichord - Clavichord

15. How many tones are there between D - C

- i. 5
- ii. 4
- iii. 6
- iv. 7

16. The correct time signature for the following



- i. 4/4
- ii. 3/4
- iii. 2/4
- iv. 4/3

17. Simple Binary form has ..... Sections

- i. 2
- ii. 3
- iii. 4
- iv. 5

18. Which of the following is written correctly



19. Ramazan is a ..... religious function.

- i. Hindu
- ii. Christian
- iii. Buddhist
- iv. Islam

20. Which of the following is longest note?

- i.
- ii.
- iii.
- iv.

(1 x 20 = 20)

## Part II

01. Answer only three questions including the first question.

# Surprise Symphony

Andante Haydn

Piano *p*

- i. What is the title of the piece.  
..... (1 mark)
- ii. What are the clefs used in this piece?  
..... (2 marks)
- iii. How many bars in this piece?  
..... (1 mark)
- iv. Name two rests you find in this piece  
.....  
..... (2 marks)
- v. Name the key of this piece?  
..... (1 mark)
- vi. Give the English meaning for P?  
..... (1 mark)
- vii. How many middle C are there in this piece  
..... (1 mark)
- viii. Name the interval market (A) Harmonic or Melodic ?  
..... (1 mark)

02. (i) Name the following notes.

(5 marks)

(ii) Write the tonic triads without key signatures.

C major   F major   G major   G major   F major

(5 marks)


3) a) Write the following Scales.

i G major ascending in Treble clef with key signature. Mark Semitones.




(4 marks)

ii F major descending in F clef using correct accidentals. Mark Semitones.



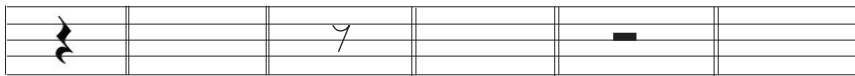
(4 marks)

iii C major ascending and descending. Mark Semitones.



(2 marks)

4) i. In each empty bar write a note in double the value to the given rest.



(3 marks)

ii Name the following intervals. (melodic or Harmonic)



(2 marks)

.....

iii Write the following notes.



Semitone above

Tone below

(2 marks)

iv Name the following key signatures.



(3 marks)



තෙවන වාර පරීක්ෂණය - 07 ශ්‍රේණිය - 2023  
Third Term Test - Grade 07 - 2023

**Western Music - Practical Test**

- 01. Any Song (Pupils choice) 5 x 2 (10 marks)
  - 1 National Anthem
  
- 02. Scales - Recorder (5 marks)
  - C major
- Scales - Piano (5 marks)
  - C major/ G major
  
- 03. Small melody play on the Piano (10 marks)
  - pupils choice
  
- 04. Clap small rhythmen pattern (10 marks)
  - Including 4 bars ( $\frac{2}{4}$  or  $\frac{3}{4}$  time)
  - teachers choice
  
- 05. Sing these Scales (10 marks)
  - C major - G major
  - Teacher plays the 1<sup>st</sup> note

