



තෙවන වාර පරීක්ෂණය - 06 ශ්‍රේණිය - 2023

Third Term Test - Grade 06 - 2023

Western Music

Two Hours

Name / Index Number :

Paper - I

● **Answer all questions on this paper it self**

..... is a pleasant sound.

- i. Sound of a water fall
- iii. A Bomb blast

- ii. Dog barking
- iv. Children Shouting

02. Which of the following is equal to two quavers,

- i. Two crotchets
- ii. One Crotchet

iii. Two minims

iv. One minim

03. The Correct G Clef is,



04. is a keyboard instrument

- i. cymbal
- ii. clappers

iii. side drum

iv. melodica

05.  This instrument is known as?

- i. woodblocks
- iii. castanet

- ii. maraccas
- iv. bells

06. 1 - 2 , 1 - 2 is known as,

- i. Triple time
- ii. quadruple time

iii. duple time

iv. unknown time

07. Which of the last four notes of the C major scale?

- i. CDEF
- ii. DEFG

iii. FGAB

iv GABC

08. Which drum is played with two sticks,

- i. Getabera
- ii. Thammattama

iii. Udekkiya

iv. Daula

09. Which of the following answers indicated the notes of this keyboard



10. You hear one of the following at weddings,

i. Happy Birthday

ii. Hewisi

iii. Viridu

iv. Jayamangala Gatha

Underline the suitable answer

11. Father's voice is (high pitch/low pitch)

12. Sports meet is a (national function / school function)

13. rest could be written in two ways (Minim/ Crotchet)

14. is sung during wesak. (Bakthi Gee/ Bajan)

15. The English meaning of 'Piano' is (Soft / Loud)

Mark ✓ or x

16. There are 5 lines and 5 spaces in a stave

()

17. The center of the Great Staff is Middle C

()

18. The waltz is a dance in Triple Time

()

19. Name of  is B

()

20. Semibreve rest hangs on 3rd line

()

Part II

Answer three of the following, including the first question.

(a) Read the given melody and answer the questions

The Wheels on the Bus

Playfully Traditional



f The wheels on the bus go round and round,
round and round round and round the wheels on the bus go
round and round, all through the town.

1. What is the name of this song?

2. What are the clefs used in this song?

3. What are the time names of the notes in this song?.

4. What are the rests used in this song?

5. What is the Italian term and English meaning used in this song

(5 marks)

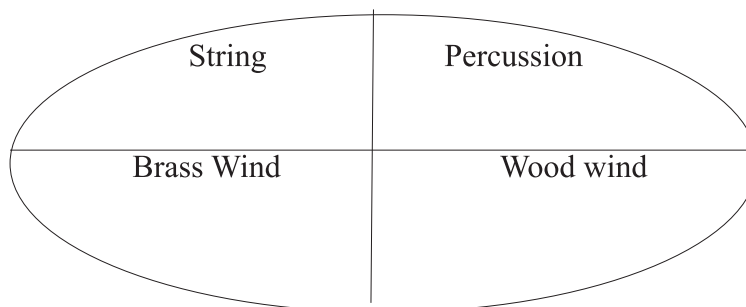
(b) Write the following notes

D below the stave F on a line B above the stave M C G in a space

(5 marks)

02. (a) Choose the instrument from the brackets and write it at the correct place.

(Cymbals, Trumpet, Viola, Bass drum, Oboe, Cello, Glockenspiel, Trombone, Flute)



(5 marks)

(b) Name two children's Song,

i

ii

(c) Write 3 man made sounds.

i

ii

iii

(3 marks)

(03)

i. Write the total value of the following notes.

ii. Add bar lines to the following tune.

iii. Fill the following with the symbols given below

(Double bar, Key Signature, Time Signature Treble Clef, Bar line)

.....

.....

(4 marks)

4) a) Write the letter names of the following


1 notes



..... , ,

(3 marks)


2 Look at the following music and write the meanings of the dynamics



(3 marks)

3) After each of these notes write a rest of equal value.

(4 marks)





තෙවන වාර පරීක්ෂණය - 06 ශ්‍රේණිය - 2023


Third Term Test - Grade 06 - 2023

Western Music - Answer Script

| | | | |
|-------|-------|---------------------|-------|
| 01. 1 | 06. 3 | 11. low pitch | 16. X |
| 02. 2 | 07. 4 | 12. School function | 17. ✓ |
| 03. 3 | 08. 2 | 13. Crotchet | 18. ✓ |
| 04. 4 | 09. 4 | 14. Bakthi Gee | 19. X |
| 05. 2 | 10. 4 | 15. Soft | 20. X |

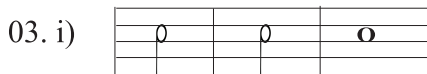
Part II

- 1 The wheels on the bus.
- 2 Treble clef and Bass Clef
- 3 Minim, Crotchet, Quaver
- 4 Semibreve, Minim, Crotchet
- 5 Forte - loud




02. a) String Percussion Brass Wind Wood wind
Viola cymbals Trumpet Oboe
Cello Bass drum Trombone Flute
Glockenspiel

- i ii
- i ii iii



- iii) Bar line, Key Signature

04. a) 1. D, G, E
2. Gradually getting louder
Loud
Soft





තෙවන වාර පරීක්ෂණය - 06 ශ්‍රේණිය - 2023

Third Term Test - Grade 06 - 2023

Western Music - Practical Test

- | | |
|----------------------------------|------------|
| Sing the scale of C major | (10 marks) |
| Sing a song of your choice | (10 marks) |
| Play the recorder notes of G A B | (5 marks) |
| Play a recorder piece or piece | (10 marks) |
| Listen and clap the rhythm | (5 marks) |
| Listen and sing the rhythm | (10 marks) |

