

<b>Grade 07</b>	<b>Third Term Test 2024</b>	<table border="1" style="display: inline-table; border-collapse: collapse;"> <tr> <td style="padding: 2px 10px;">62</td> <td style="padding: 2px 10px;">E</td> <td style="padding: 2px 10px;">I,II</td> </tr> </table>	62	E	I,II
62	E	I,II			
Index No : .....	<b>Civic Education</b>	<b>Time : 02 hours</b>			

**Part I**

- **Answer all the questions given in part 01**
- **For the questions 01 to 05 select the most suitable answer and fill in the blanks**
- 01. Aggregation of behavioral patterns, habits, customs and beliefs of people in any society belong to the ..... (society, culture, moral)
- 02. .... followed in cultural festivals vary from community to community. (customs and rituals, rules, heritages)
- 03. .... is the basic unit which transmit cultural from one generation to the other. (temple, school, family)
- 04. Hydraulic civilization is one of the finest examples of Sri Lankan ..... (pride, identity, attention)
- 05. Four Bo leaves in the four corners in Sri Lankan national flag symbolize the ..... (four prejudices, the four sacred objects, four sublime states of the mind)
- **For questions no.06 to 10 put (✓) if the statement is correct or (✗) if the statement is incorrect in the brackets provided.**
- 06. When hoisting the national flag at night the respective place should have enough light. ( )
- 07. Different rules and regulations have been enacted to safeguard the cultural heritages by the Archaeology Department. ( )
- 08. When the national anthem is sung, a person can stand in a comfortable posture and sing the national anthem. ( )
- 09. During the British Colonial Era, British Emblem with lion and the unicorn had been in use. ( )
- 10. The National flower of Sri Lanka had been selected only considering its aesthetic value. ( )
- **For question no 11 to 15 underline the correct answer.**
- 11. Find the person who has defined culture.
 

1. Abraham Lincoln	2. Sealor	3. E.B.Tylor	4. Dudley seers
--------------------	-----------	--------------	-----------------
- 12. Which is not shown by the yellow colour lion in the national flag is,
 

1. Sinhala nation	2. Bravery	3. Fairness	4. Life blood of all the people
-------------------	------------	-------------	---------------------------------
- 13. The ownership of the state Emblem and the authority to use it belongs to the
 

1. Executive president	2. Prime minister	3. Judicial minister	4. Speaker of the parliment
------------------------	-------------------	----------------------	-----------------------------
- 14. Volley ball as the national sport of Sri Lanka was introduced by,
 

1. A british	2. An Amarican	3. A Japanese	4. An indian
--------------	----------------	---------------	--------------
- 15. A person becomes success due to his good qualities. Which answer consist only the god qualities?
 

1. Anger, hatred, fighting	2. Hatred, patience, jealous
3. Discipline, honest, friendly	4. Sympathy, honest, anger



- From question No 16 to 20 answer the questions using the pictures A and B given below.

16. What is shown by picture A?

.....

17. Mention 2 symbols included in it?

i. ....

ii. ....

18. Write what is represented by the symbols you mentioned above.

i. ....

ii. ....

19. What is the name of the festival shown by the picture B?


.....

20. Name two experiences you can taken by an occasion given in picture B?

i. ....

ii. ....

(2x2=40)



B

## Part II

- First question is compulsory.
- Answer question number 1 and four other questions.

- Question No 1 carries 16 marks and 11 marks each for question no 2 to 6.

01. i. Name the two family units mentioned by the given pictures A and B.

A. ....

B. .... (2 mark)

ii. Mention two common feature that can be seen in a family

1. ....

2. ....




A



B

iii. Observe the given picture well and answer the following questions.



Duties needed to be fulfilled by a student to a teacher	Duties needed to be fulfilled by a teacher to a student
1. ....	1. ....
2. ....	2. ....

iv. Write three activities that you can do to spend your leisure effectively.

1. ....


2. ....

3. ....

(3 marks)



v.



Write three advantages you can get by engaging in the activity shown by picture A.

1. ....
2. ....
3. ....

(3 marks)

vi. Mention two accidents that can be happened engaging in the activity in picture A.

1. ....
  2. ....
- (2 marks)

02. i. Write three benefits gain by the family members whose parents earn sufficient income through employment.

ii.

meter reading/ teaching/ nurse/ teacher instructor/  
ambulance driver/ electrician/ drivers/ technicians

The above shows a list of employment opportunities which are used to fulfill our day to day needs. Complete the following table using above details.

Service	Employment
Education	1.
	2.
Health	1.
	2.
Electricity	1.
	2.
Transportation	1.
	2.

(8 marks)

03. i. Given below are some social institutions and the services provided by them to people in maintaining inter- relationships with human society. Match the service with the correct social institutions.

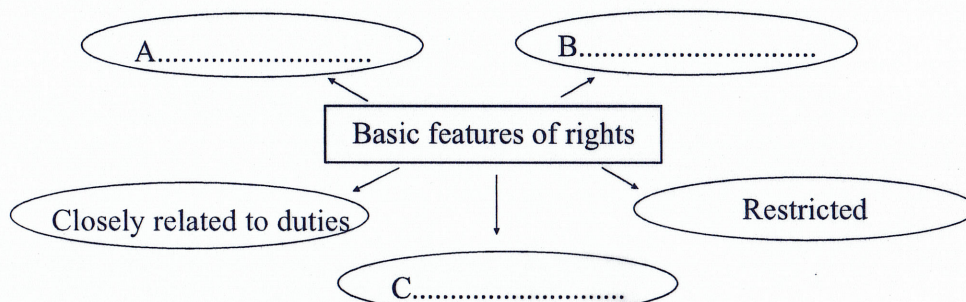
Religious institutions
Village development associations
Sports club

- A. Village development
- B. Providing leadership to the village
- C. Respecting the leadership
- D. Providing welfare facilities in a funeral.
- E. Training to tolerate victory and defeat.

ii. Write two advantages you get by maintaining inter- relationships with neighbours. (2 mark)

iii. Write three qualities you need to develop when maintaining inter - relationships with neighbours. (3 mark)

04. i.





The above chart shows the basic features of rights. Fill in the blanks.

A. ....

B. ....

C. ....

(3 marks)

ii. Mention 3 civil rights entitled to a person.

1. ....

2. ....

3. ....

(3 mark)

iii. Write 3 importance of enjoying rights within a legal framework.

1. ....

2. ....

3. ....

(3 mark)

iv. Write 02 actions taken to safe guard elders.

1. ....

2. ....

05. State four qualities a person should be developed to face challenges successfully.

1. ....

2. ....

3. ....

4. ....

(4 mark)

ii. Write 03 challenging situations faced by a person in the modern society.

1. ....

2. ....

3. ....

iii. Write 04 steps to win the challenges.

1. ....

2. ....

3. ....

4. ....

(4 mark)

06.

being self - disciplined / paying taxes /  
safeguarding traditions/ treating parents / To be obligate /  
the government/ maintaining the law and order

The above shows the obligations and responsibilities to be fulfilled for the well being of society by people. Answer the following questions using them.

i. Select and write the legal obligations.

1. ....

2. ....

3. ....

4. ....



ii. Write separately the moral obligations

1. ....

2. ....

3. ....

(3 marks)

iii. What are responsibilities?

.....


..... (2 marks)

iv. Write 03 advantages of fulfilling duties and responsibilities.


advantages of fulfilling  
duties and responsibilities — 1.....  
2.....  
3.....

(3 marks)

07.




A



B



C



D

i. Complete the following table using the above pictures.

Picture	Respective Religion
A	.....
B	.....
C	.....
D	.....

ii. Name two books written on the importance of following morals.

1. ....

2. ....

(4 marks)

iii. Mention 4 multi - cultural features can be seen in Sri Lankan society

1. ....

2. ....

3. ....

4. ....

(4 marks)