

Grade 06

Third Term Test - 2024

61 E I,II

Name :

Geography

Time : 02 hours

Instructions :-

- Answer all the questions for part I on this paper.
- Answer part II on a separate paper.
- First question of part II is compulsory and answer 4 more questions.

Part I

- Select the most suitable answer from the bracket and with it in the blank space.

- 01) The (anemometer, wind direction indicator, pressure gauge) is used to measure the speed of wind.
- 02) Pilimathalawa is famous for (brassware, mats, masks) production.
- 03) The (India ocean, Bay of Bengal, Arabian Sea) is located from the west direction of Sri Lanka.
- 04) The city of Kandy is geographically important due to its location in (a temple of tooth relic, a plateau, an old kingdom)
- 05) Taiwan is an island which located in the (Indian, Pacific, Atlantic) Ocean.

- Fill in the blanks with suitable words from question No 6 - 10.

- 06) Rathnapura and districts belongs to Sabaragamuwa province.
- 07) is known as the southern expressway.
- 08) is an important natural sea port that linked East and west from the ancient times.
- 09) The Tropic of Cancer is located degrees south of the equator.
- 10) The most efficient type of light is

- If the following statements are correct put (✓) if not put (×) from question No 11 - 15.

- 11) Plant leaves are a recyclable waste. ()
- 12) Air pollution causes diseases related to digestive system. ()
- 13) With Water pollution, people suffer from diseases like 'Barawa'. ()
- 14) Extraction of mineral resources is a major benefit we can get from land. ()
- 15) Health and Education services are provided in Sri Lanka free of charge. ()

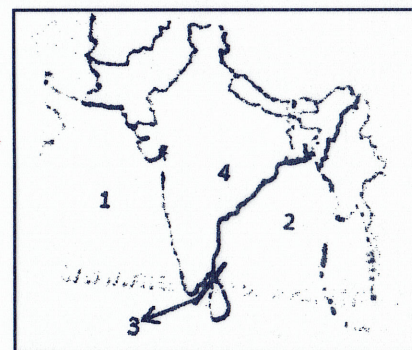
• **Underline the most correct answer from question number 16 - 20.**

- 16) Dumbara is famous for,
 1. brassware 2. tile & bricks 3. mats 4. masks
- 17) Which can be considered as a major crop grown in Jaffna?
 1. Tobacco 2. Onion 3. Chillies 4. Potatoes
- 18) When you stand facing rising sun, stretching your hand, what is the direction of your right hand ?
 1. Northern 2. Southern 3. Eastern 4. Western
- 19) What is the religious symbol of Hindus
 1. Dharma chakra 2. The holy cross 3. half moon and star 4. Om symbol
- 20) Which ethnic group has the second largest population in Sri Lanka
 1. Sinhala 2. Sri Lankan Tamil 3. Indian Tamil 4. Muslim
 (2×20=40)

Part II

- 01) a. Answer the questions based on the given model map showing the location of Sri Lanka.

- i. Which country is indicated by number 4. (2m)
 ii. Indicate the oceanic zone numbered n number 1 and 2 respectively. (2m)
 iii. What is the strait indicated by number 3 ? (2m)
 iv. Name 2 other countries apart from the country shown in number 4. (2m)



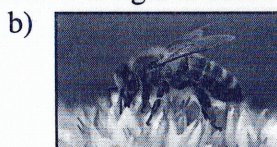
- b. i. Mention two important things in city of Galle. (2m)
 ii. Name 2 other islands apart from Sri Lanka. (2m)
 iii. Mention two highways in Sri Lanka. (2m)
 iv. Mention the relative location of Sri Lanka. (2m)

- 02) i. Define 'weather' (2m)
 ii. Mention the weather conditions of Puttalam, Nuwara Eliya, Galle and Anuradhapura according to the weather conditions given in brackets (dry, wet, rainy, misty, windy) (3m)
 iii. Write a hypothetical weather report including at least 3 elements of weather conditions. (3m)
 iv. Write 3 advantages of knowing the weather information. (3m)

- 03) i. Name 3 sources from which we get water. (3m)
 ii. Write 2 reasons why water is considered as scarce resource. (4m)
 iii. Copy the following table and fill in the blanks given. (4m)

The problems arising with water shortage	Methods of water conservation
1.	1.
2.	2.

- 04) i. Name 2 migratory birds. (2m)
 ii. Create a table and mention 3 benefit of a plants to the environment and 3 benefit to humans in it. (3m)
 iii. Write 2 uses of the each animal indicated in figures below.



iv. State one benefit of the following animals.

- Crow - pheasant
- Dragon fly
- Earth worm

(4m)

05) i. Name 2 uses of energy used in a home. (2m)

ii. Copy the table below and complete it with the given information.
(lakes, rivers, fields, roads, desert, rocks, gardens)

Natural features	Man made features

iii. Write two reasons that affected to

a. the rise in energy demand. (2m)

b. state 3 methods that can be used to minimize wastage of power of energy. (3m)

06) i. Mention the religions represented by the following religious symbols A, B, C and D. (2m)

ii. Indicate the major ethnic group living in the following areas.

A - Northern province

B - Central province

C - Southern province


(3 m)

iii. a. Create a table and include the unique crop grown in the northern area, mountainous area and dry zone. (3m)

b. Mention the information about a cottage industry based on traditional technological knowledge under the given topics.

- Distribution
- Raw material
- Products

(3m)



07) i. What are the two types of geographical features. (2m)

ii. Classify the following features according to the above classification. (7i)
(forests, roads, farmlands, rivers, highlands, parks, playgrounds, beaches) (4m)

iii. Compare the difference between a picture and a sketch map. (5m)

Geography - Garde 6
Answers

Part I

- | | | | |
|-----------------|--------------------------|-------|-------|
| 1) Anemometer | 6) Kegalle | 11) x | 16) 3 |
| 2) Brassware | 7) E2 | 12) x | 17) 4 |
| 3) Arabian Sea | 8) Trincomalee | 13) x | 18) 2 |
| 4) On a plateau | 9) To the north | 14) ✓ | 19) 4 |
| 5) The pacific | 10) Light Emitting Diode | 15) ✓ | 20) 2 |

Part II

- 01) a.i. India ii. Arabian Sea iii. Palk strait iv. Sri Lanka, Nepal, Bhutan, Bangladesh, Pakistan
 b.i. Location of Dutch Fort, Galle Fort, Cricket Stadium etc.
 ii. Madagascar, Taiwan, Cuba, Sicily, Greenland
 iii. Southern Expressway (E2), Colombo
 Katunayake Expressway (E1), Outter
 Circular Expressway (E3), Central
 Expressway (E5)

- 02) i. Weather is the state of the atmosphere over a short period of time.

ii.

Area	Weather condition
Puttalam	Windy Weather
Anuradapura	Dry Weather
Nuwara Eliya	Misty Weather
Galle	Rainy Weather

- iii. a. In the last 24 hours that ended at 6.00 am, there may be some occasional showers in the south and south - west parts of the island. There may be some strong winds in the coastal areas in the northwestern and western parts. The rest of the island is dry. Maximum temperature is recorded from Jaffna and the minimum temperature is recorded from Nuwara Eliya.

b. - It makes easier for the people to plan their work. - Fishermen can save their lives, boats and equipment. - Plan the air port operations etc.

- 03) i. Sources like precipitation, springs, streams, rivers etc.

- ii. Two facts like most of the earth's water is salted, small amount of fresh water is lefted.

Problems due to lack of water	Steps to maintain water in sustainable manner
1. Spread of diseases	1. Prevention of wastage
2. Interruption of hydro power generation	2. Reduction of pollution
3. Lack of drinking water	3. Minimizing the use of agrochemicals

- 04) i. Indian pitta, paradise fly catcher, Sivuru Hora etc.

ii.

Benefits to the Environment	Benifit to man
- Purification of the atmosphere	- Provide food and medicine
- Minimize soil erosion	- Provide wood
- Provide food & shelter for animals	- Provide fuel

- iii. a. Butterfly adds beauty to the environment, contribution to the pollination etc. , Bees pollinate flowers and produce honey , Bat propagates seeds of plants and fertilizes the soil by their stool

b. Crow - pheasant - destroy smalls that harm the crop.
 Earthworm - contributes to loosen the soil and to enrich it.
 Dragonfly - Destroy insects that harm paddy fields.

- 05) i. Firewood, gas, electricity, petroleum, solar energy, biogas etc.

ii.

Natural features	Man made features
Lakes	fields
Rivers	roads
Deserts	gardens
Rocks	

- iii. a. Complexity of needs, improvement of transportation, use of machinery in agriculture etc.
 b. Use of LED bulbs, Stop wastage of energy, use of effcient wood stoves etc.

06) i. 1. Buddhism 2. Islam 3. Catholicism 4. Hinduism

ii. Northern - Sri Lankan Tamil
Central - Indian Tamil
South - Sinhalese

iii. a.

Northern region	Mountainous region	Dry zone
Grapes Banana Onion Chili	Leeks Carrot Potatoes Beetroot	Moringa Long beans Bitter melon ridge gourd

b. Brassware - Pilimatalawa , Copper , Vases , Lamps etc.
Care products - Radawadunna , Cane , House hold goods
Furniture - Moratuwa , Timber, Furniture

07) i. Physical features and manmade features

ii. Physical - Forests , rivers , highlands , beach

Manmade - Roads , croplands , gardens , play ground

iii. - Drawing shows overview

- But map is two dimensional

- Drawing use many colours but map uses conventional colours and symbols