



දෙවන වාර පරීක්ෂණය - 09 ශ්‍රේණිය - 2024
Second Term Test - Grade 09 - 2024

Geography

2 hours

Name/index Number

Part I

- Answer all questions in the paper itself.
 - Select the most suitable answer and write it on the given space for questions from no. 01 to 05.
- 01) Ocean is located to the north of Asian continent. (Arctic / Pacific / Antarctic)
- 02) River flows into Caspean Sea. (Amur / Ural / Lena)
- 03) Climatic Zone is distributed between two tropics of Cancer and Capricorn.
(Tropical / Temperate / Frigid)
- 04) is important country which have many people of mongoid racial type.
(Afganistan / Maldives / South Korea)
- 05) Districts like Colombo and Galle are located in the of Sri Lanka.
(Coastal plain, Intermediate plain / Central hills)
- If the following statements are correct put (✓) and if not put (×) in the space given for questions from no 06 to 10.
- 06) Honda and Suzuki companies in Japan manufacture both motorcycle and automobile. ()
- 07) Jabil Ali is a free trade harbour in Dubai. ()
- 08) 'Athugala' in Kurunagala is an example for a residual hill. ()
- 09) There are 105 main river valleys in Sri Lanka. ()
- 10) The highest temperature in Asia is recorded from Verkhoyansk in Russia. ()

- Underline the correct answer for questions from no. 11 to 15.

- 11) The longest river in Asia is,
 - 1) River Hwang - ho
 - 2) Mekong river
 - 3) River Yangtze
 - 4) Indus river
- 12) The answer consisted only with the trees located in the tropical rain forests is,
 - 1) Mahagani, Ebony, Sandalwood wood
 - 2) Oak, Mulberry, Chestnut
 - 3) Pine, Fur, Sprus
 - 4) Rose wood, Larch, Beach
- 13) The period of the second inter monsoon is,
 - 1) February, March
 - 2) October, November
 - 3) December, January
 - 4) March, April
- 14) The amount of rainfall received by the semi arid zone of sri lanka is,
 - 1) Above 2000 mm
 - 2) Between 1250mm - 2000 mm
 - 3) Between 1750 mm - 2000 mm
 - 4) Between 650 mm - 1250 mm
- 15) Which province has the least population in Sri Lanka?
 - 1) Uva province
 - 2) North Central Province
 - 3) Nothern Province
 - 4) Sabaragamuwa Province

- From question no. 16 to 20. Fill in the blanks.

- 16) Khariff and are the main crop seasons in Pakistan.
- 17) According to the Per Capita Gross National Product, is the country that possess the third largest economy in the world.
- 18) Gampaha and districts have the highest population distribution in Sri Lanka.
- 19) and thermal power are major ways of providing electricity in Sri Lanka.
- 20) Deduru oya and river are the two rivers which divide the wet zone from the dry zone of Sri lanka.



දෙවන වාර පරීක්ෂණය - 08 ශ්‍රේණිය - 2024

Second Term Test - Grade 08 - 2024

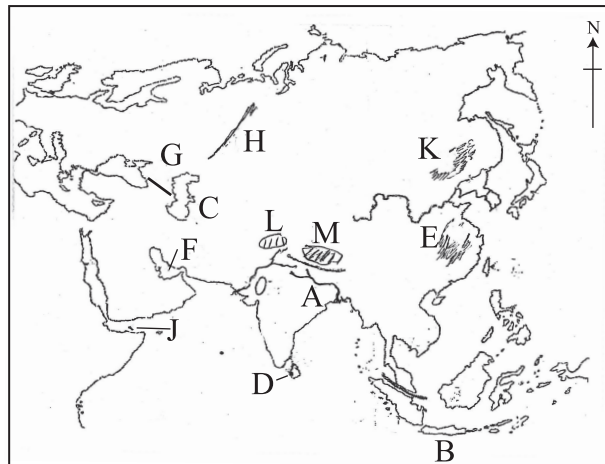
Geography

Name/index Number

Part II

- The first question is compulsory. Select 4 more questions.

01. A) Answer following questions regarding the map of Asia given below.



- What is the river shown by letter A? (1 mark)
- What is the island shown by letter B? (1 mark)
- What is the sea shown by letter C? (1 mark)
- What is the City shown by letter D? (1 mark)
- Which letter denotes North Chinese plain? (1 mark)
- Which letter denotes Persian Gulf? (1 mark)
- Which letter denotes Caucasus Mountain? (1 mark)
- Which letter denotes Pamir Plateau? (1 mark)

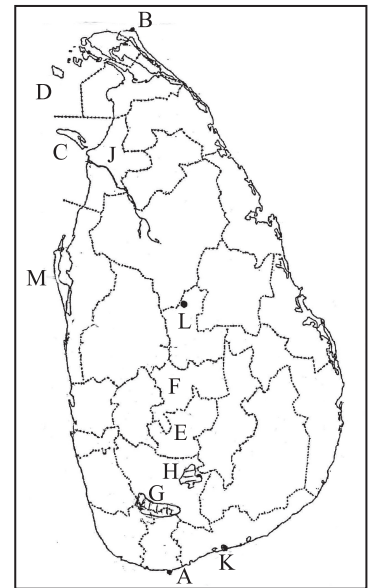
b) Answer following question regarding the Sri Lanka map given below.

Write the respective letter belonging to the following places from the map.

- i) Dondra Head
- ii) Delft island
- iii) Kandy district
- iv) Sinharaja forest

2) Select and write the places indicated by the following letters from the map.

- i) River shown by letter J
- ii) City shown by letter K
- iii) Residual hill shown by letter L
- iv) Lagoon shown by letter M



02. i Name each relief zone shown by number

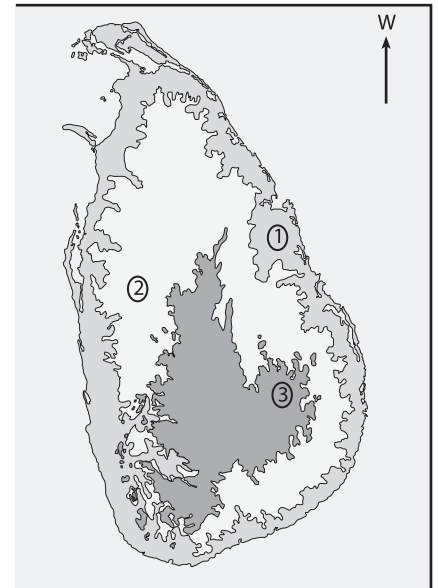
1,2,3 in the Sri Lanka map (3 marks)

ii Write 2 relief features distributed in the zone

number 1 along with one example for each feature (4 marks)

iii Mention 4 human activities conducted in

the zone show by number (3 marks)



03. i) Name the zones of natural vegetation shown by letter

A, B and C in the Sri Lanka map (3 marks)

ii) a) Mention two climatic factors used to classify the natural vegetation in Sri Lanka.

b) Mention a district located in the vegetation zone shown by letter F (3 marks)

iii) Answer following questions regarding the mangrove vegetation in Sri Lanka.

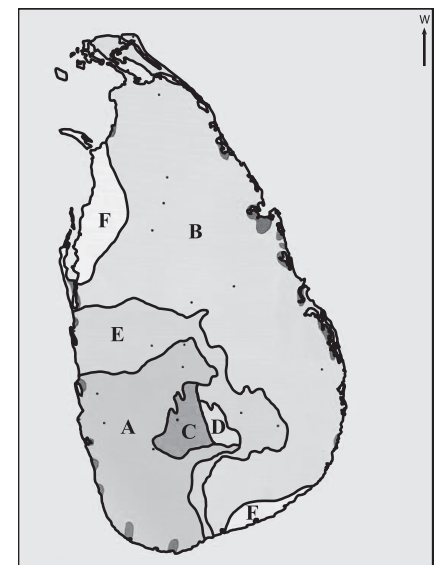
a) Two areas of distribution

1. 2.

b) Two varieties of trees

1. 2.

c) Mention a significant feature of mangrove vegetation. (5 marks)



04. i) Write the respective country of following densely populated cities. (3 marks)
 a) Shanghi b) Tokyo C) New Delhi
- ii) Mention 4 factors contributed for the high concentration of population in the western province of Sri Lanka. (4 marks)
- iii) a) Write two problems created in the urban settlements of Sri Lanka.
 b) Briefly explain how one of those problems can be minimized. (4 marks)
05. i) Mention the 3 broad sections of economical activities in any country. (3 marks)
 ii) Write 4 areas of Sri Lanka engage in livestock farming. (4 marks)
 iii) a) Which District has the highest distribution of industries in Sri Lanka.
 b) Briefly explain two strategies followed by Sri Lanka to develop the roads and transportatopn sector of Sri Lanka. (4 marks)
06. i) What is meant by weather? (3 marks)
 ii) Write 4 factors affected for the changes in the distribution of temperature in Sri Lanka. (4 marks)
 iii) a) Mention two types of rainfall in Sri lanka.
 b) Briefly explain the formation of rainfall of one of them. (4 marks)
07. i) Mention the 3 ancient civilizations originated based on Asia. (3 marks)
 ii) Write 4 reasons to consider Asia as a unique region in the world. (4 marks)
 iii) a) What is the type of natural vegetation distributed in the temperate zone of Asia.
 b) Briefly describe two features of that vegetation type. (4 marks)

