



වයඹ පළාත් අධ්‍යාපන දෙපාර්තමේන්තුව
Provincial Department of Education - NWP


දෙවන වාර පරීක්ෂණය - 07 ශ්‍රේණිය - 2024
Second Term Test - Grade 07 - 2024

WESTERN MUSIC

Time : 2 Hr

නම / විභාග අංකය:

Paper I

- 01. A White note with a stem is called
i Minim ii Crotchet iii Quaver iv Semibreve
- 02. Which of the following is a Sri Lankan drum ?
i Thabla ii Congo iii Thammettama iv Side Drum
- 03. The total value of the given notes would be. 
i Minim ii Semibreve iii Crotchet iv Breve
- 04. Which of the following performance are used by one performer ?
i Duet ii Trio iii Minuet iv Solo
- 05. Which style was used during the Baroque Period ?
i Polyphonic ii Homophonic iii Monophonic iv Jazz
- 06. Which of the following is a new music composition ?
i Air on G String ii Fugue iii The Entertainer iv Pink Panther
- 07. Who composed "The Entertainer".
i J.S. Bach ii Scott Joplin iii W.A. Mozart iv G.F. Handel
- 08. How many notes are there in a scale ?
i 5 Notes ii 6 Notes iii 7 Notes iv 8 Notes
- 09. Which of the following is written correctly.



- 10. Which of the following is a percussion instrument ?
i Clarinet ii Trumpet iii Timpani iv Melodica
- 11. Which of the following has a tone ?



- 12. Ramazan is a religious function
i Hindu ii Buddhist iii Islam iv Christian

13. Which of the following is suitable time signature for given rhythm.



- i 3/4 ii 4/4 iii 2/2 iv 2/4

14. How many quavers are there in a semibreve?

- i 8 ii 6 iii 4 iv 5

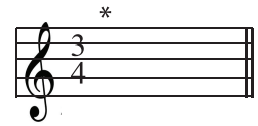
15. Which of the following is the correct way of Writing 'G' above the staff?



16. Which of the following is the number of lines in the Great staff ?

- i 11 ii 10 iii 5 iv 9

17. Which of the following rest is used to complete the bar with the time signature of



- i ii iii ξ iv \neg

18. Another name for Bass clef is

- i 'G' clef iii 'C' clef iii 'F' clef iv All of these

19. Who Wrote Water music ?

- i Mozart iii Handel iii Bach iv Beethoven

20. Which of the following is the English meaning for 'F' ?

- i Soft iii Loud iii Piano iv Moderately loud

(20 marks)

Answer question No 1 and two other questions

(1). Read the given music Score and answer the following questions.


Minuet in G major
BWV Anh 114 Johann Sebastian Bach



- i. Write the title of this Music ? (1 m)
- ii. What are the two clefs used in this melody
.....
..... (2 m)
- iii. What is the time Signature ? (1 m)
- iv. How many bars are there in the melody..... (1 m)
- v. Who is the composer of this music (1 m)
- vi. How many minims are there in this music (1 m)
- vii. Give the english meaning of 'P' (1 m)
- viii. To which period does this composer belong (2 m)

(2). Draw a keyboard and name all the keys.


(3). i Write the following scale.



Bass clef, C major ascending and descending. Mark semitones.

(5 marks)

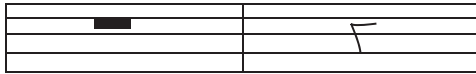
ii Name the following notes.



.....

(3 marks)

iii Name the following rests.



.....

(2 marks)

(4). i Write another note after the given note as required



Semitone
higher

Semitone
lower

Tone
lower

Tone
higher

Semitone
lower

(5 marks)

ii Name the following instruments.



.....

(5 marks)



වයඹ පළාත් අධ්‍යාපන දෙපාර්තමේන්තුව
Provincial Department of Education - NWP

දෙවන වාර පරීක්ෂණය - 07 ශ්‍රේණිය - 2024
 Second Term Test - Grade 07 - 2024

WESTERN MUSIC

Answer

Name/Index Number :-

Paper I

- | | | | |
|---------|---------|---------|---------|
| 01. i | 06. iv | 11. iv | 16. i |
| 02. iii | 07. ii | 12. iii | 17. i |
| 03. ii | 08. iv | 13. iv | 18. iii |
| 04. iv | 09. ii | 14. i | 19. ii |
| 05. i | 10. iii | 15. iii | 20. ii |

Paper II

- | | |
|----------------------------------|--------------------------|
| 1. | |
| i. Minuet in G major | v. Johans Sebastian Bach |
| ii. Treble clef | vi. 38 |
| Bass clef | |
| iii. 3 3 crotchet beats in a bar | vii. Soft |
| 4 | |
| iv. 16 | viii. Baroque period |

2.

D ^b	E ^b	G ^b	A ^b	B ^b	D ^b	E ^b	G ^b	A ^b
C [#]	D [#]	F [#]	G [#]	A [#]	C [#]	D [#]	F [#]	G [#]
D	D	F ^b	E [#]	A	C ^b	B [#]	F ^b	E [#]
D	D	E	F	G	A	B	C	D
D	D	E	F	G	A	B	C	D

3. i

- ii B, E, E
 iii Semibreve Crotchet

4. i

- i Side drum ii Cymbol iii Bass drum iv Castanets sv Triangle



දෙවන වාර පරීක්ෂණය - 07 ශ්‍රේණිය - 2024
 Second Term Test - Grade 07 - 2024

WESTERN MUSIC

Practical Test

Name/Index Number :-

Paper I

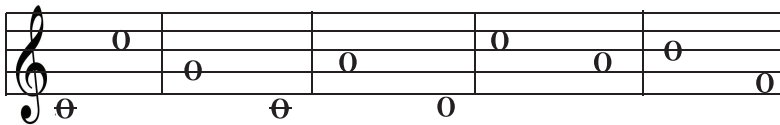
- 01. Sing a Song - (10 marks)
- 02. Recorder Song - (10 marks)
- 03. Clap the Rhythm.



(10 marks)

04. Mark 2nd note as High or low sound

- a) b) c) d) e)



- a) b) c) d) e)

High					
Low					

(10 mark)

05. Identify 5 notes on key-board (As Teacher's choice)

(10 mark)