



වයඹ පළාත් අධ්‍යාපන දෙපාර්තමේන්තුව  
Provincial Department of Education - NWP

දෙවන වාර පරීක්ෂණය - 06 ශ්‍රේණිය - 2024  
Second Term Test - Grade 06 - 2024

Geography

Time: 2 hours

Name/Index No:

Part I

Instructions:

Answer all the questions in part I in the paper itself. Use separate papers to answer the questions in part II. The first question in the part II is compulsory and select four more questions.

Select the most suitable answer and write it on the given space for question No. 01 to 05.

01. .... the largest administrative unit in the administrative hierarchy where school is located. (District, Province, Divisional Secretariat Division)
02. There may be several ..... in a Grama Niladhari Division. (Districts/Provinces/Villages)
03. Eastern province has ..... districts. (5, 3, 2)
04. .... is the smallest district in Sri Lanka. (Jaffna, Galle, Colombo)
05. The condition of the atmosphere that prevails for a short period of time in a particular area is called ..... (Temperature, Weather, Climate)

\* If the following statements are correct put 'C' if not put 'W' for questions from No. 6 to 10.

06. Wind direction indicator is used to find the direction. ( )
07. We can enjoy the cool breeze near the sea, rivers, reservoirs and streams. ( )
08. Accidents can be minimized by knowing the information regarding weather. ( )
09. Some features are shown in three dimension is a difference between a picture and a map. ( )
10. Indian Pittah is an example for migrant birds. ( )

**\* Underline the most suitable answer for question No. 11 to 15**

11. Which of the following is not considered a benefit of a plant.
- |                         |                      |
|-------------------------|----------------------|
| 1) Prevent soil erosion | 2) Provide habitats  |
| 3) Helps in population  | 4) Provide biomasses |
12. Which of the following is the harmful species of animal for us?
- |        |            |         |        |
|--------|------------|---------|--------|
| 1) Dog | 2) Monitor | 3) Crow | 4) Rat |
|--------|------------|---------|--------|
13. Which of the following is the symbol of Hindu religion ?
- |                    |                  |
|--------------------|------------------|
| 1) Crescent & Star | 2) Dhamma Chakka |
| 3) Om Symbol       | 4) Holy Cross    |
14. The religious group with the lowest percentage living in Sri Lanka is,
- |                |          |          |              |
|----------------|----------|----------|--------------|
| 1) Catholicism | 2) Hindu | 3) Islam | 4) Buddhists |
|----------------|----------|----------|--------------|
15. An important equipment used in pottery industry is,
- |              |               |             |          |
|--------------|---------------|-------------|----------|
| 1) Mainahama | 2) Sakaporuwa | 3) Burumaya | 4) Brush |
|--------------|---------------|-------------|----------|

**Fill in the blanks for questions from No. 16 to 20.**

16. Sri Lanka is belonged to ..... continent.
17. Sri Lanka and India are divided by ..... strait.
18. .... is famous for production of masks.
19. Paradise Fly Catcher is a ..... bird.
20. Diseases like Dengue and Malaria are spread by .....


## Part II

01. Answer the following questions regarding the pictures showing different landscape in our immediate Surrounding.

1



2




3



4



5



- i. Name the relevant landscape of the houses located on picture no.1, 2, 3, 4 and 5 respectively. (5m)
- ii. Write one feature of each landscape shown by no. 1 and 5 respectively. (2m)
- iii. Write one advantage of living in a landscape shown by no. 3 and 4 respectively. (2m)
- iv. Write one disadvantage of living in a landscape shown by no. 1 and 2 respectively. (2m)
- v. Write two services available on a landscape shown by no. 5 (2m)
- vi. What could be the main occupation of people live in landscape no. 2 (1m)
- vii. Write one crop suitable for the each landscape shown by no. 1 and 4 respectively. (2m)

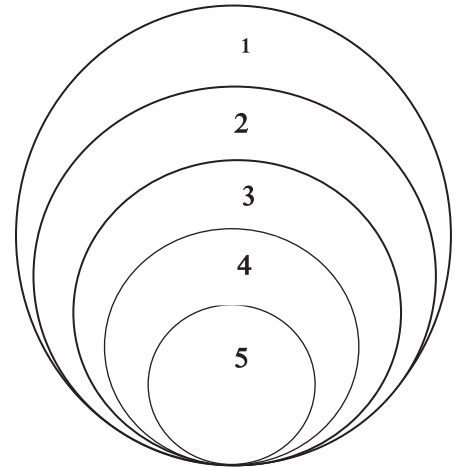
02. i. Write the answer that matches the corresponding letter in the table below regarding weather Instruments. (4m)

Element of weather	Instrument	Unit
Temperature	A .....	Celsius
B .....	Anemometer	C .....
Pressure	D .....	Millibar

- ii. Name two professions which weather information is important. (2m)
- iii. Where is the Meteorological Department of Sri Lanka is located? (2m)
- iv. Name three different weather conditions you can experience in a year. (3m)

03. i. Mention the three differences between a sketch map and a picture. (6m)  
 ii. Prepare a list of landscape features located in the immediate surrounding of your school.  
 (not less than 4) (2m)  
 iii. Write three uses of a map. (3m)

04. i. Indicate the hierarchy of administrative divisions related to your school using the numbers given in the figure. (5m)  
 ii. Who are the main official of the government related to the third and fourth administrative divisions? (2m)  
 iii. Which province has the highest number of districts? (2m)  
 iv. Mention 4 districts belong to that province. (2m)



05. i. Which instrument is used to find the direction of north? (3m)  
 ii. Write the names of the main directions and the sub directions respectively. (4m)  
 iii. Mention two uses of direction. (2m)  
 iv. List the directions of the following cities respectively. (2m)  
 Baticaloa      Jaffna      Colombo      Galle

06. i. According to the location of your school, indicate the different locations in the main directions. (4m)  
 ii. Mention the element of weather and the respective instrument which is identified using direction. (2m)  
 iii. Name two modes of transport that require directions. (2m)  
 iv. Describe an activity that can be used to find direction (3m)

07. i. Write two medicinal plants from the list given within bracket. (2m)  
 (Aralu, Bulu, Mahogani, Rubber, Atteria)  
 ii. Prepare a list of benefits we gain from plants. (not less than 6 uses)  
 iii. Separate and write the species of animal that are helpful and harmful for us from the list below.  
 (rat, earthworm, bat, termite, mosquito, snail, crow-pheasant, bee, butterfly ) (3m)  
 iv. Write one benefit of each helpful animals respectively. (3m)