

Year End Evaluation

Model Paper

Grade 11

Western Music I


Time – 01 hour

Answer all questions

01) Which of the following is the Tonic Major Scale Which has 05 Sharps?


- (1) G minor (2) B Major (3) B^b Major (4) E Major

02) Which of the following figures indicates the number of tones in the given interval?



- (1) 10 (2) 8 (3) 5 (4) 6

03) which of the following Time – Signatures will best suit the following melody?



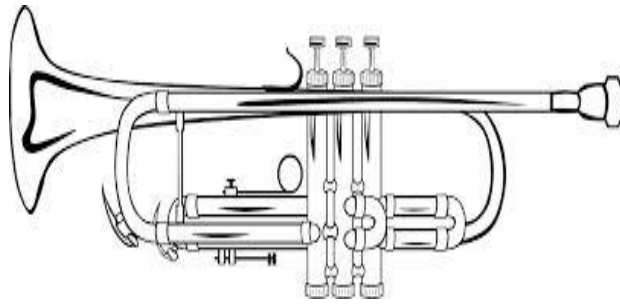
- (1) 12 (2) 12 (3) 12 (4) 4

- 4 8 16 4

04) Which of the following is a request for a repeat performance at an Orchestral Concert?

- (1) Hurrah (2) Whistle (3) Applause (4) Encore

05) Which of the following is the Correct Order of the diagram below from left to right?



- 1) Bell, mouth piece, valves
- 2) Mouth piece, valves, Bell
- 3) Bell, Valves, mouthpiece
- 4) Valves, mouthpiece, Bell

06) Which of the following is the first line of a Nadagam song?

- 1) සුවඳ පඳිම
- 2) ගම්භීර තෙදැනි
- 3) වාසනා දිනේකි
- 4) දන්නෝ බුදුන්ගේ

07) Which of the following pair of composers were born in the same year?

- 1) Wagner – Verdi
- 2) Haydn – Mozart
- 3) Chopin – Schubert
- 4) Bach - Beethoven

08) Which of the following Composer was called ‘Prince of Polyphonic music’?

- 1) F.J.Haydn
- 2) L.V. Beethoven
- 3) W.A.Mozart
- 4) J.S. Bach

09) A Work Written in Jazz Style?

- 1) Peter and the wolf
- 2) The Entertainer
- 3) Peter Grimes
- 4) Racockzy March


10) Which of following is another name for Binary form?

- 1) Movement of Continuity
- 2) Episodical form
- 3) Song form
- 4) First movement form

11) Which of the following Combination of intervals will give a diminished triad?

- 1) Major 3rd, Diminished 5th 2) Minor 3rd, Perfect 5th 3) Minor 3rd, diminished 5th
4) Minor 3rd, Diminished 3rd

12) Describe the following triad?





- 1) Major, 2nd inversion 2) Minor, 1st inversion 3) Major, 1st inversion 4) Minor, 2nd inversion

13) Which of the following symbols indicate a trill?

- 1) 2) 3) 4)

14) Which of the following is the lowest note that could be played on the cello?



15) Which of these drums are used for Sri Lankan rituals?

- 1) Devol beraya 2) Davula 3) Udekkiya 4) Thammettama

16) Which of the following feature helps us to identify the tone quality of different instruments?

- 1) Pitch 2) Frequency 3) Timbre 4) Amplitude

17) Which one of these would be most suitable for a scale with 60 notes?

- 1) Pentatonic 2) Whole tone 3) Chromatic 4) Diatonic

18) Which of the following Italian Term describes that it should be sung in a song – Speech manner in free rhythm with minimal accompaniment?

- 1) Senza 2) Cantabile 3) Recitativo 4) Tessitura

19) Which of the following compositions is based on the environment?

- 1) Pastoral Symphony 2) Gypsy Rondo 3) Rhapsody in Blue 4) the Trout Quintet

20) Which of the following Indian instruments has seven main strings

- 1) Guitar 2) Harp 3) Thampura 4) Sitar

21) Which of the following is the frequency of the given note?



- 1) 440 2) 880 3) 220 4) 256

22) Which of the following oriental notation is equivalent to 4th space E^b in the Treble stave?

- 1) و 2) و 3) و 4) و

23) Which of the following cadence is called the 'False close'?

- 1) Interrupted 2) plagal 3) Perfect 4) Imperfect

24) The number of inversions Possible in a Dominant 7th Chord?

- 1) One 2) Two 3) Three 4) Four

25) Which of the following is the most important part of the ear without which hearing cannot take place?

- 1) Ossicles 2) Cochlea 3) Eardrum 4) Eustachian Tube

26) which of the following is a Grand March Composed by Verdi used at the poening Ceremony of the Suez Cannel?

- 1) Aida 2) Rigoletto 3) Iltravatore 4) Rackoczy March

27) Which of the following is the interval from Middle C to fourth space E^b in the G clef?

- 1) Compound Minor 10th 2) Minor 3rd 3) Major 10th 4) Minor 10th

28) Following is a line of a folk song Name the type of song?

“උඩින් සිටින ඉරු දෙවියෝ සෙවන දරා

බිමින් සිටින මිහිකන් දෙවි කළස දරා”

- 1) Goyam Kavi 2) Pal Kavi 3) Paru Kavi 4) Pathal Kavi

29) Which of the following will suit for the given example?



- 1) Lower Mordent 2) Inverted Turn 3) Upper Mordent 4) Turn

30) Which of the following is the enharmonic equivalent of the 5th accidental in B major?

- 1) A sharp 2) B natural 3) B sharp 4) B flat

Write short answers for the following questions.

31) The V.P.S of the third string of the violin would be

32) The type of song and dance derived from the Portugese is

33) The basis of sounds would be

34) The 'Lieder' is the name given to

35) Term given to three bones of the ear

36) Another name for the leader of the orchestra

37) Another name used for 'diminuendo'

38) Another name given to the Cor Auglais

39) Sixth degree of C melodic minor as cending form

40) An Orchestral work which highlights one or two solo performers displaying his skill

.....